
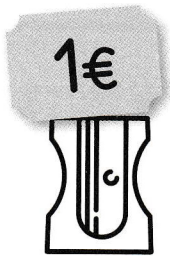

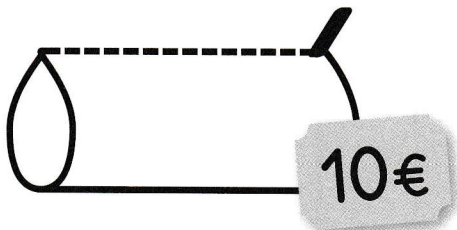


# Résoudre des problèmes impliquant des prix (2)

✓ Je résous des problèmes avec les euros en utilisant des opérations.

1

Sami veut acheter une trousse, un taille-crayon et une pochette de feutres. Combien va-t-il payer en tout? Entoure les pièces et les billets qu'il faut.



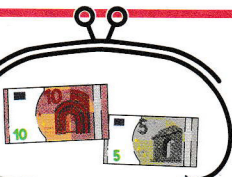
Écris le calcul:

..... + ..... + ..... = .....


Sami va payer ..... euros.

2

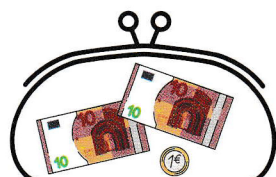
Calcule la somme dans chaque portemonnaie.




$$10 + 5 = 15$$



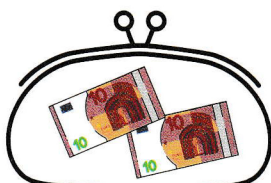
$$+ \dots + \dots = \dots$$




$$+ \dots + \dots = \dots$$



$$\dots + \dots = \dots$$



$$\dots + \dots = \dots$$



$$\dots + \dots + \dots = \dots$$